



Determine which letter best represents the length / height.

**Answers**

**Millimeter (mm)**

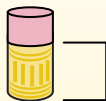
A millimeter is about the thickness of a credit card.



**Centimeter (cm)**

10 mm = 1 cm.

The metal portion of a pencil is about 1 cm. A ruler is about 30 centimeters.



**Meter (m)**

100 cm = 1 m

From the floor to a door knob is about 1 meter.



**Kilometer (km)**


1,000 m = 1 km

Most major roads are at least a kilometer long.



1. \_\_\_\_\_
2. \_\_\_\_\_
3. \_\_\_\_\_
4. \_\_\_\_\_
5. \_\_\_\_\_
6. \_\_\_\_\_
7. \_\_\_\_\_
8. \_\_\_\_\_
9. \_\_\_\_\_

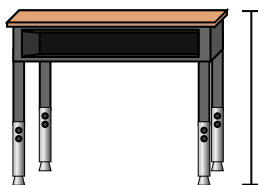
1)



Pen

- A. 12 centimeters
- B. 30 millimeters
- C. 30 centimeters
- D. 5 meters

2)



Desk

- A. 15 centimeters
- B. 2 meters
- C. 70 centimeters
- D. 30 centimeters

3)



Frog

- A. 20 centimeters
- B. 8 centimeters
- C. 4 millimeters
- D. 60 centimeters

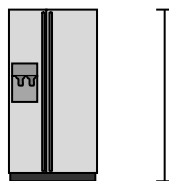
4)



Bicycle

- A. 10 centimeters
- B. 1 meter
- C. 3 meters
- D. 25 centimeters


5)



Refrigerator

- A. 180 centimeters
- B. 30 centimeters
- C. 5 kilometers
- D. 4 meters

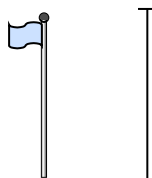
6)



Clothes Dryer

- A. 60 centimeters
- B. 1 meter
- C. 25 centimeters
- D. 15 centimeters


7)



Flag Pole

- A. 2 kilometers
- B. 9 meters
- C. 300 centimeters
- D. 2 meters

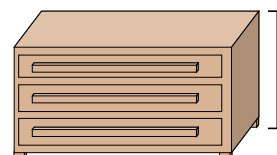
8)



Tennis Ball

- A. 3 millimeters
- B. 25 centimeters
- C. 8 centimeters
- D. 60 centimeters

9)



Dresser

- A. 45 centimeters
- B. 90 centimeters
- C. 3 meters
- D. 30 centimeters



Determine which letter best represents the length / height.

**Answers**

**Millimeter (mm)**

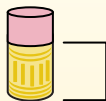
A millimeter is about the thickness of a credit card.



**Centimeter (cm)**

10 mm = 1 cm.


The metal portion of a pencil is about 1 cm. A ruler is about 30 centimeters.



**Meter (m)**

100 cm = 1 m

From the floor to a door knob is about 1 meter.



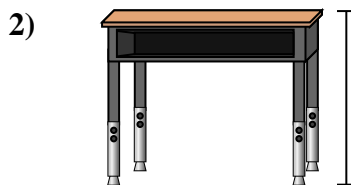
**Kilometer (km)**

1,000 m = 1 km


Most major roads are at least a kilometer long.



- Pen
- A. 12 centimeters
  - B. 30 millimeters
  - C. 30 centimeters
  - D. 5 meters



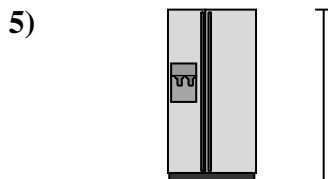
- Desk
- A. 15 centimeters
  - B. 2 meters
  - C. 70 centimeters
  - D. 30 centimeters



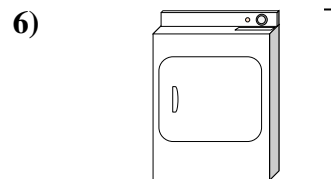
- Frog
- A. 20 centimeters
  - B. 8 centimeters
  - C. 4 millimeters
  - D. 60 centimeters



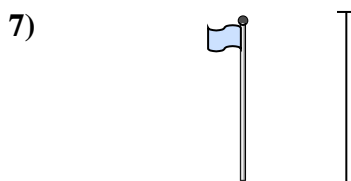
- Bicycle
- A. 10 centimeters
  - B. 1 meter
  - C. 3 meters
  - D. 25 centimeters




- Refrigerator
- A. 180 centimeters
  - B. 30 centimeters
  - C. 5 kilometers
  - D. 4 meters



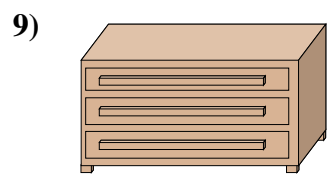
- Clothes Dryer
- A. 60 centimeters
  - B. 1 meter
  - C. 25 centimeters
  - D. 15 centimeters



- Flag Pole
- A. 2 kilometers
  - B. 9 meters
  - C. 300 centimeters
  - D. 2 meters



- Tennis Ball
- A. 3 millimeters
  - B. 25 centimeters
  - C. 8 centimeters
  - D. 60 centimeters



- Dresser
- A. 45 centimeters
  - B. 90 centimeters
  - C. 3 meters
  - D. 30 centimeters

- 1.   **A**
- 2.   **C**
- 3.   **B**
- 4.   **B**
- 5.   **A**
- 6.   **B**
- 7.   **B**
- 8.   **C**
- 9.   **B**